



INDIAN SCHOOL AL WADI AL KABIR

DEPARTMENT OF EVS [2023 – 2024]

LESSON: REPRODUCTION IN ANIMALS

WORKSHEET -2

RESOURCE PERSON: Ms. Bibi Khuteja

NAME: _____ CLASS: IV SEC: _____ DATE: _____

I. Carefully read the descriptions given and write the correct term.

- a) The hard-outer protective layer of an egg is called a _____.
- b) The baby cockroach is called a _____.
- c) The shell formed around a caterpillar is called a _____.
- d) The baby frog that comes out of the egg is called a _____.

II. Unscramble the letters given below to form words from the lesson.



tioncudprore		sllig	
oyrbme		ingtlmou	
awpsn		varal	
seloptad		gnihctah	

III. Establish the relationship and complete the following.

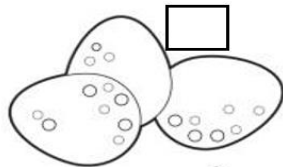



- a. Mammals : give birth to young ones :: Birds: _____
- b. Fish: fry :: Frog: _____
- c. Deer: fawn :: Cow : _____
- d. Yolk: yellow liquid:: Albumen: _____

IV. Observe the given pictures and answer the questions that follow.

1. Colour each of the stages of the life cycle of a fish. Identify and name the stages. Then draw arrows connecting the stages in order.



2. Arrange the stages involved in the life cycle of a bird in the correct sequence by numbering them correctly. Fill in the blanks with the correct answer.



a. The baby growing inside a bird's egg is called an _____.


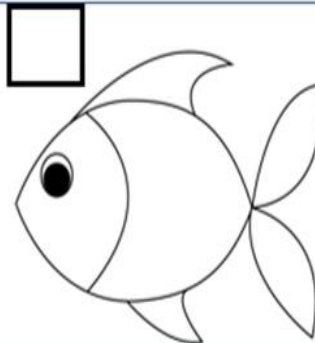
b. Inside the shell there is a clear sticky liquid called _____.

c. _____ provides food to the baby growing inside.

d. The process by which the fully-grown chick breaks the egg and comes out after 21 days is called _____.

3. Rahul learned in class that all living things reproduce. Some animals lay eggs, while others give birth to their young ones. He needs your help to colour the given animals and select the odd one out from among the given pictures on the basis of its mode of reproduction.

a



b

